

Q3. Read the words on the front of the card. Then draw a picture. Write a message to go inside the card.

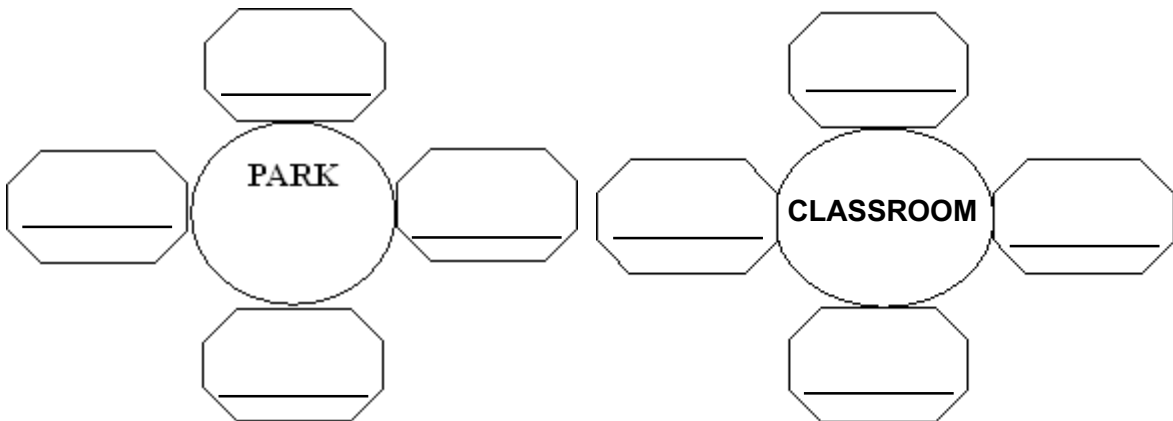


Q4. The grass is green and the sky is blue. Can you think of some more things in your surroundings which are green or blue in colour?





Q5 Write any 4 things that you might see in these places.



Q6. Given below are a few things: Mention the group to which these things in each row belong. The first one has been done for you.

- 1) Sunflower ,lotus ,lily ,marigold FLOWERS
- 2) Carrot , pea , potato , onion _____
- 3) Sofa , bed ,table , chair _____
- 4) Horse , lion , zebra , giraffe _____
- 5) House fly, lady bird, mosquito, grasshopper. _____

HINDI

प्र०1 आ, इ, ई, उ, ऊ की मात्राओं से दो दो फलों या सब्जियों के नाम लिखो।


आ -
इ -
ई -
उ -
ऊ -


प्र०2 ए की मात्रा से कोई पाँच शब्द लिखो ।


.....
.....
.....


MATHEMATICS


Q1. Sandy has made a picture using different shapes. Help her by colouring all the triangles - blue, squares - red, rectangles - green and circles -yellow. Also count the different shapes.



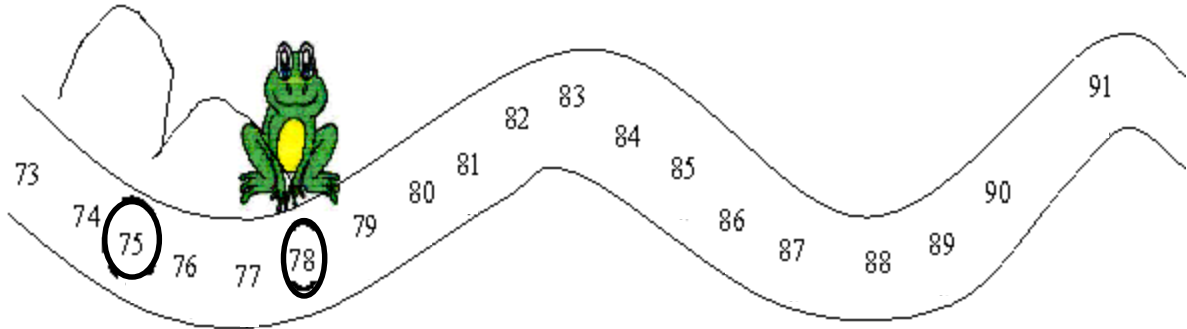
How many  s? _____

How many  s? _____

How many  s? _____

How many  s? _____

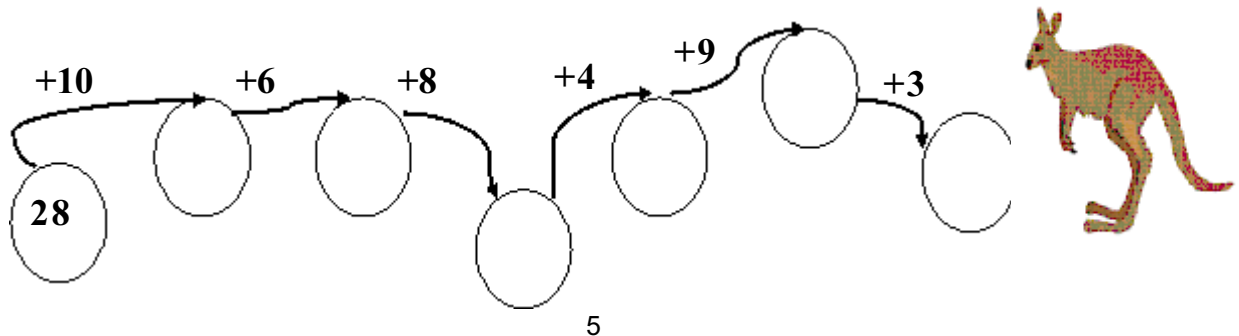
Q2. Titu frog jumps over two numbers and reaches the third number. Where will Titu go next? Make a ring on the other numbers on which Titu hops.



Q3. Mental Drill

- 1) The successor of the smallest two digit number is _____
- 2) The digit in the tens place of 79 is _____
- 3) _____ tens and _____ ones together make 73.
- 4) The sum of the first 3 numbers = _____
- 5) 5 times _____ = 20 + 0
- 6) 59 is just before _____
- 7) The predecessor of the greatest 2 digit number is _____
- 8) The numeral for one hundred nineteen = _____
- 9) 49 , 54 , _____ , _____ (complete the pattern)

Q4. PEPPER THE KANGAROO HOPS AND GETS ON THE STONE. Write the numbers on the stones.



SECTION B - PHYSICAL ACTIVITIES/SOCIAL BEHAVIOUR/CULTURAL

Q1. Mention any five good things that you have done during your vacation.

Q2. Practise the breathing exercise in the morning in some open space of your house. You can breathe in (inhale) and breathe out (exhale). Try to hold your breath at least for 2 seconds. See for how long you can hold it. (Keep on increasing the time for holding the breath).

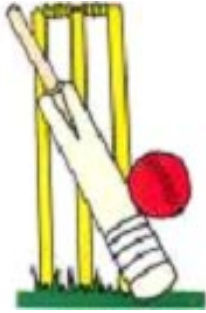
Q3. Choose the correct magic word for the statements from the help box and fill in the gaps:

I beg your pardon, Sorry, Excuse me, Thank you

- 1) When you borrow a thing from someone you must say _____
- 2) When you sneeze or burp you must say _____
- 3) If you don't understand what has been said , you will say _____
- 4) When you hurt your friend you must say _____
- 5) When you yawn, you cover your mouth with your hand and say _____

Q4. The objects shown in pictures are lying in the sports room. Write the name of the game below the picture.











- (a) Hockey (b) Badminton (c) Cricket (d) Football
(e) Lawn Tennis (f) Table Tennis

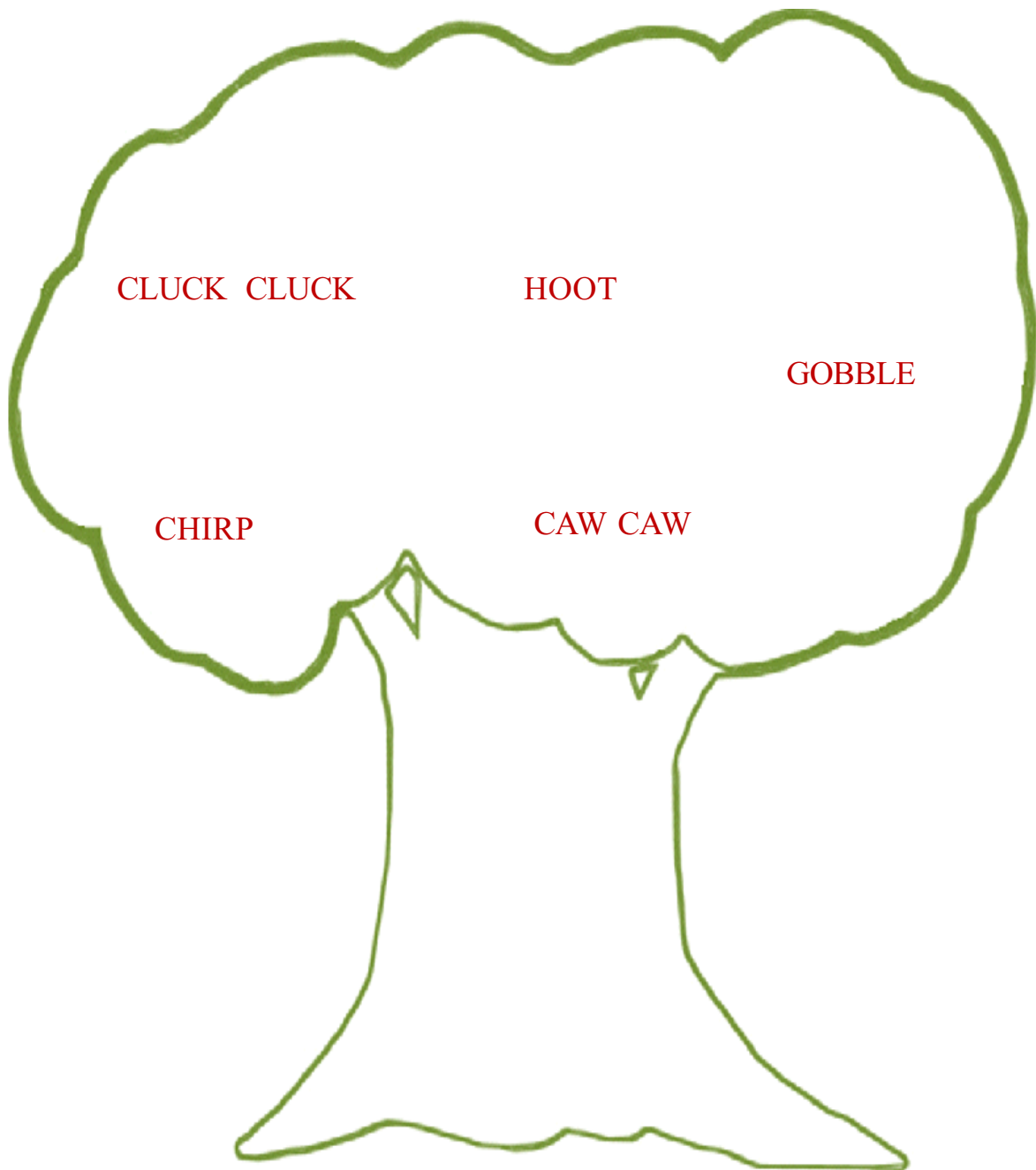
Q5. Watch Dance and Music Programmes on T.V. during Summer Vacation. Learn the steps of the least one dance to be presented by you in your cultural activity period in July. Also learn one new English son and write down its wordings.

SECTION C - ENVIRONMENTAL STUDIES & WORLD VISION


Q1. While watching television there are so many advertisements that you see. Given below are some 'Trade Names' which stand for some particular items. Complete the name. The first letter of each item is given.

1. **LAKHANI** = S _____
2. **PEPSODENT** = T _____
3. **TITAN** = W _____
4. **PANTENE** = S _____
5. **DOVE** = S _____
6. **AMUL** = B _____

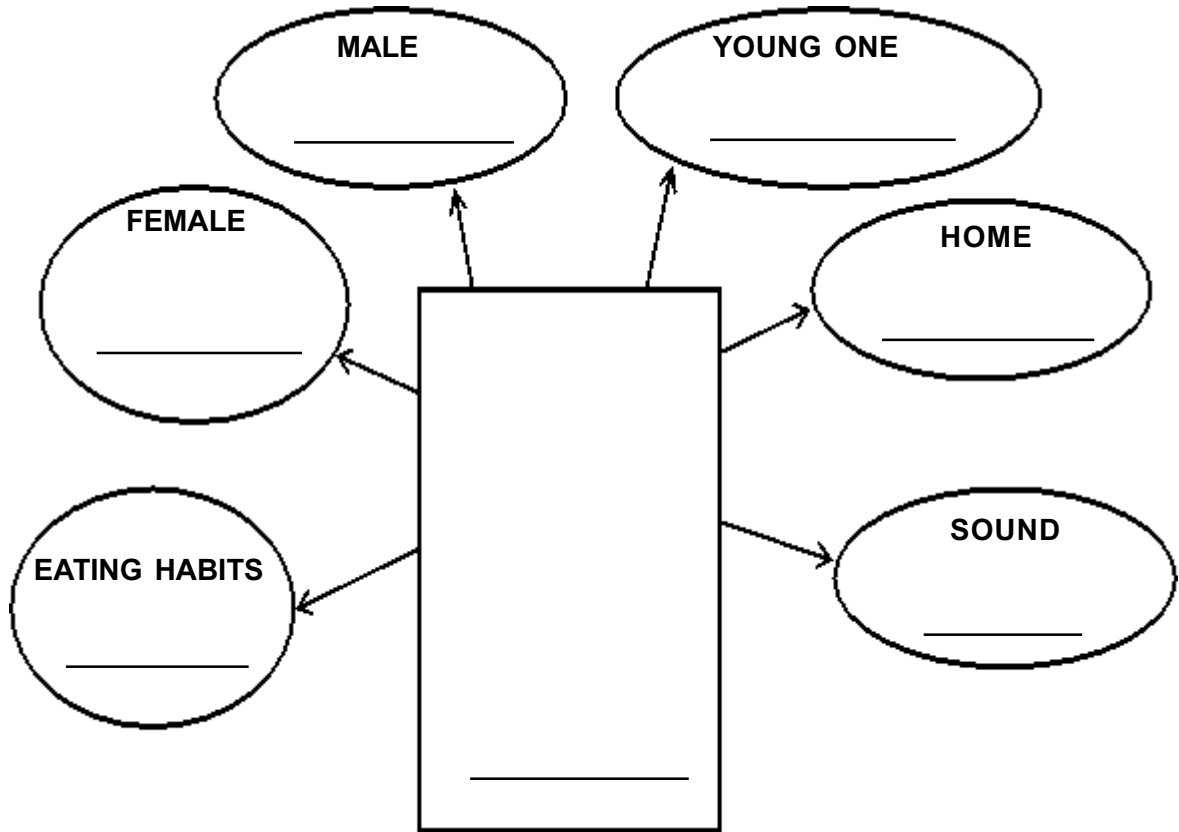
Q.2 Sounds of various birds can be heard from the different nests. Identify the sounds, name the bird and also paste its pictures




Q.3 On a drawing sheet make a poster on -
Water is precious
Do not Waste it
Save Water



Q.4 Paste the picture of any animal in the box and furnish the details of that animal



Q5. The results of the Delhi Lok Sabha elections will be declared during your summer break. Paste the picture of the newly elected Prime Minister of India.



SECTION D - INFORMATION & TECHNOLOGY

- Q1. Make a collage of the different vehicles and write the number of wheels that each vehicle has?**
- Q2. Make a wheel using waste material.**
- Q3. Find out the names of any 5 famous companies manufacturing Input Devices like Mouse & Keyboard.**