


**(LANGUAGE SKILLS, MATHEMATICS)****ENGLISH**

- Q.1 Mr. Roy is sitting on the river bank. He is fishing. He pulls up his fishing rod. He has caught an old shoe. His friends are laughing. Imagine you are Mr. Roy, tell your friend who was not there on the river bank about the incident.
- Q.2 From the outline given below, write in about fifty to sixty words a paragraph describing the incident.
- Dark rainy night ; I woke up at night ; noise in the next room ; could it be a thief ? ; - only a mouse!
- Q.3 What do you see:
- In a zoo
  - On a railway platform
- Q.4 Write dialogues / conversation with your friend to fix a venue and time to meet in a mall or amusement park.


**MATHEMATICS**

- Q. 1 Do you know what a palindrome is? A palindrome reads the same forward and backwards for example, the words RADAR and LEVEL. The numbers 424 and 3223 are also palindromes. Can you think of 10 such numbers.
- Q.2 I am a number. To know what number am I, add the largest 3 digit number and smallest 4 digit number.
- Q.3 Aman walked 743 m to reach the temple from his house. He then walked 278 m from the temple to reach the market, in the opposite direction. What is the distance of the market from his house?
- Q.4 Make a landscape or seascape by cutting out various geometrical shapes from paper and paste them on a sheet.
- Q.5 Make a list of familiar objects that have conical shapes such as coffee filter, etc. Draw a wind chime using conical shapes.
- Q.6 Frame 3 word problems with each of the given addition facts:-
- $$457 + 674 = 1131$$
- $$1254 + 2532 = 3786$$

III Q.7 Count the number of triangles, circles, squares and rectangles in each of the given figures: -




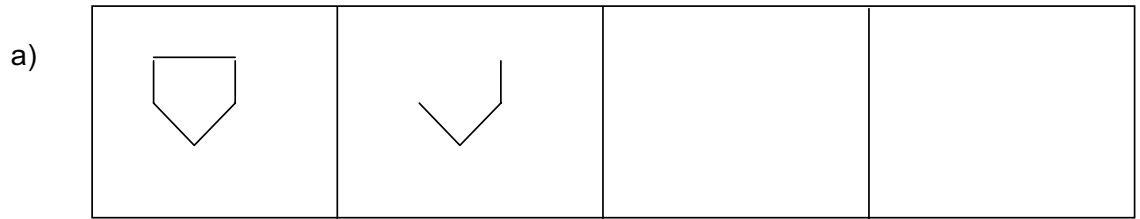
Q.8 Read the price tags of the following articles and answers the following:-



- a) Total price of a car and a teddy bear .....
- b) Total price of a car and cap.....
- c) Which two items will cost Rs 20?.....
- d) If I had Rs 30 and I bought a cap and a ball, how much money is left ?  
.....

Q.9 Pattern is a set of shapes, numbers or words that are repeated according to a rule at regular intervals.

**III** Complete the sequence: -



**Q 10** Mental Maths

- a)  $9 + \underline{\hspace{2cm}} = 25$
- b)  $\underline{\hspace{2cm}} + 11 = 33$
- c)  $66 - 11 = \underline{\hspace{2cm}} \times 5$
- d)  $44 + \underline{\hspace{2cm}} = 44$
- e)  $54 - \underline{\hspace{2cm}} = 44$
- f)  $71 + \underline{\hspace{2cm}} = 81$
- g)  $20 + 5 = 5 + \underline{\hspace{2cm}}$
- h)  $28 - 3 = \underline{\hspace{2cm}}$
- i)  $76 = \underline{\hspace{2cm}} + 10$
- j)  $10 \times 2 = 5 \times \underline{\hspace{2cm}}$

**Q 11** Solve the puzzle:

|           |              |           |              |   |
|-----------|--------------|-----------|--------------|---|
| <b>20</b> | +            | <b>40</b> | =            |   |
| +         | <del> </del> | +         | <del> </del> | + |
| <b>5</b>  | +            | <b>6</b>  | =            |   |
| =         | <del> </del> | =         | <del> </del> | = |
|           | +            |           | =            |   |

### III

### HINDI

प्र०1 आपको कौनसा कंप्यूटर खेल सबसे अच्छा लगता है और क्यों ?

प्र०2 हिन्दी की कोई दो कहानियाँ पढ़कर दस नये चुने तथा उनके अर्थ लिखकर वाक्य बनाएं।

### SECTION - B

#### (PHYSICAL ACTIVITIES, CULTURAL, SOCIAL SKILLS)

- Q.1 Make a salad bowl for yourself with the help of your mother. Write the names of the ingredients and paste their pictures
- Q.2 Adopt a new game. Write related rules and regulations.
- Q.3 Mosquitoes are a menace. We all do different things to escape from them. Draw a mosquito coil and write a jingle to advertise it.
- Q.4 "Beat the heat with a cool treat" Learn to make any 3 refreshing drinks and write down their recipes.
- Q.5 The main characters in a fable are usually animals through whom we learn to differentiate between right and wrong and the values of friendship , confidence and hard work. Write down the names of any such five fables and the morals they teach.

### SECTION - C

#### (WORLD VISION, ENVIRONMENTAL STUDIES)

- Q.1. Stand in your neighbourhood park . Write what lies to the east , west , north and south of it.
- Q.2 Choose your favourite IPL Team, collect information about the team players, the matches played and the rank secured. Paste pictures of your favourite team.
- Q.3 "Say no to Plastic bags" is the quote for the day. Make a stylish environment friendly shopping bag.
- Q.4 Let's all go on a food trip. Name any five delicacies from different states of India and paste relevant pictures. Mark these states on a map of India.
- Q.5 The best way to travel in India is the Indian Railways. Write the names of the railway stations of Delhi and any two prestigious trains of the Indian Railways.

### SECTION - D

#### (WORLD OF INFORMATION AND TECHNOLOGY)

- Q1. Precautions are to be taken before entering a Computer Lab. Make a chart illustrating "Computer Lab Etiquettes".
- Q2. Computers are indispensable part of our day-to day life. List various places where Computers are used, e.g., Shopping malls, Banks, Departmental Stores, etc. Paste pictures and collect computerised transaction slips.
- Q3. Make a captivating / eye -catching advertisement for promoting Nano .Paste a picture too.
- Q4. Badges present in the front of the car show its manufacturing companies. Make a colorful collage of the logo/ badges of different car manufacturing companies.